

Quiz I (UTR) MTH 213, Spring 2019

Ayman Badawi

$$\frac{15}{15}$$

QUESTION 1. Consider the following code

$k * k * k * k * k * k$

For $k = 4$ to $(2n^4 + 5n + 3) \rightarrow 2n^4 + 5n + 3 - 4 + 1 = (2n^4 + 5n)$
 $L = k^6 - 8 * k^3 + 2 * k^2 + 5 \rightarrow 13$ times
 For $i = 4$ to $(k + 3) \quad k + 3 - 4 + 1 = k$
 $S = 9 * i^3 + 5 * k - 7 * i^2 * k \rightarrow 9$ times
 Next i
 Next k

(1) Find the exact number of multiplication, addition and subtraction that the code will execute.

Outerloop = $13(2n^4 + 5n)$

$k = 4$

$k = 2n^4 + 5n + 3$

$\Rightarrow (4)(3) = 7$

$\Rightarrow (2n^4 + 5n + 3)(3)$

$(4)(9) =$

$= (2n^4 + 5n + 3)(9)$

First term = 36

last term = $9(2n^4 + 5n + 3)$

$= \left(\frac{36 + 9(2n^4 + 5n + 3)}{2} \right) (2n^4 + 5n) + 13(2n^4 + 5n)$

(2) Find the complexity of the code.

$O(\text{code}) = n^8$

$\frac{4 \times 3}{5 \times 3} = 2 \frac{12}{15} \rightarrow \text{remainder}$

QUESTION 2. (1) Solve $6x = 12$ over planet Z_{15} .

$6x \pmod{15} = 12$

$a = 6, b = 12, n = 15$

$\gcd(6, 15) = 3 \rightarrow \# \text{ of solutions}$

$= \{2, 7, 12\}$

$n = \gcd(a, n) - d$
 $15 = 3 - d$
 $15 \mid 12? \text{ Yes}$

$\frac{15}{3} = d = \frac{n}{\gcd(a, n)}$
 $d = 5$

$x_1 = 2$

$x_2 = 7$

$x_3 = 12$

(2) Solve over planet Z $6x \pmod{15} = 12$

$\Rightarrow \{2 + 5k, k \in Z\}$

Faculty information

Quiz II(MW) MTH 213, Spring 2019

Ayman Badawi

$\frac{15}{15}$

QUESTION 1. a) Solve $3x = 6$ over planet Z_9

$\frac{5}{5}$

$gcd(3, 9) = 3 \mid 6$

$9 = gcd(3, 9) \times d \Rightarrow$

$3(x) = 6 \Rightarrow x = 2$

$9 = 3 \times (3)$
 $d = 3$

over planet $Z_9 \Rightarrow x \in \{2, 5, 8\}$

b) Now solve over planet Z . $3x \pmod{9} = 6$ (i.e., $3x = 6 \pmod{9}$)

$\frac{1}{1}$

over planet $Z_9 \Rightarrow 3x = 6 \Rightarrow$ with $x = 2$.

thus in $\mathbb{Z} + 3k$ with $k \in \mathbb{Z}$ over planet Z .

QUESTION 2. Consider the system

$x = 7 \pmod{10}$

$x = 7 \pmod{11}$

a) Find the unique solution over Planet Z_{110}

$\frac{8}{9}$

$gcd(10, 11) = 1$ CRT applies

$n = 10 \times 11 = 110$

$m_1 = \frac{n}{n_1} = \frac{110}{10} = 11$

$m_2 = \frac{n}{n_2} = \frac{110}{11} = 10$

m_1^{-1} in Z_{10}

$11x = 1 \Rightarrow x = 1$ in Z_{10}
 $(m_1^{-1} = 1)$

m_2^{-1} in Z_{11}

$10x = 1 \Rightarrow x = 10$ in Z_{11}

$(m_2^{-1} = 10)$

$x = a_1 m_1 m_1^{-1} + a_2 m_2 m_2^{-1} = (7 \times 11 \times 1) + (7 \times 10 \times 10) = 777 \pmod{110}$

b) Find all solutions over PLANET Z .

$\frac{1}{1}$

over planet $Z \Rightarrow 7 + 110k$ with $k \in \mathbb{Z}$

Faculty information

Ayman Badawi, Department of Mathematics & Statistics, American University of Sharjah, P.O. Box 26666, Sharjah, United Arab Emirates.
E-mail: abadawi@aus.edu, www.ayman-badawi.com

Quiz II(MW) MTH 213, Spring 2019

Ayman Badawi

$$\frac{15}{15}$$

QUESTION 1. a) Solve $3x = 6$ over planet Z_9

① check if solution exists

$\gcd(3, 9) = 3$ and $3|6 \therefore$ Yes, and there are three solutions

② $x_1 = 5$ (by trial & error)

③ compute difference, $d \neq n = \gcd(a, n) d$
 $9 = 3d \rightarrow d = 3$

④ $x_2 = 5 + 3 = 8$; $x_3 = 8 + 3 = 11 \equiv 2 \pmod 9 \Rightarrow x_3 = 2$

b) Now solve over planet Z . $3x \pmod 9 = 6$ (i.e., $3x = 6 \pmod 9$)

general solution over planet Z :

$$2 + 3k, k \in Z$$

$$\therefore \begin{cases} x_1 = 5 \\ x_2 = 8 \\ x_3 = 2 \end{cases} \text{ over Planet } Z_9$$

QUESTION 2. Consider the system

$$\begin{aligned} x &= 7 \pmod{10} \\ x &= 7 \pmod{11} \end{aligned}$$

a) Find the unique solution over Planet Z_{110}

① check if CRT applies

$\gcd(10, 11) = 1 \therefore$ Yes, CRT applies

② $n = n_1 n_2$

$$= 10 \cdot 11 = 110$$

\therefore there is a unique solution over Z_{110} (green)

③ $m_1 = \frac{n}{n_1} = \frac{11 \cdot 10}{10} = 11$ $m_2 = \frac{n}{n_2} = 10$

④ m_1^{-1} in Planet Z_{n_1}

m_2^{-1} in Planet Z_{n_2}

$\rightarrow (11)^{-1}$ in Z_{10}

$(10)^{-1}$ in Z_{11}

$11 = 1 \pmod{10}$

$$11x = 1 \rightarrow x = 1$$

$$10x = 1 \rightarrow x = 10$$

* unique soln., $x = a_1 m_1 m_1^{-1} + a_2 m_2 m_2^{-1} =$

$$= 7 \cdot 11 \cdot 1 + 7 \cdot 10 \cdot 10 = 777 = 7 \pmod{110}$$

b) Find all solutions over PLANET Z .

general solution over Planet Z :

$$7 + 110k, k \in Z$$

Faculty information

Ayman Badawi, Department of Mathematics & Statistics, American University of Sharjah, P.O. Box 26666, Sharjah, United Arab Emirates.
 E-mail: abadawi@aus.edu, www.ayman-badawi.com

Quiz IV (UTR) MTH 213, Spring 2019

Ayman Badawi

QUESTION 1. Let $A = \{3, -2, \{7\}, 12, 23\}$. Write Down T or F

$$P(A) = \{A, \emptyset, \{3\}, \{-2\}, \{\{7\}\}, \{12\}, \{23\}, \{3, -2\}, \{3, \{7\}\}, \{3, 12\}, \{3, 23\}, \{-2, \{7\}\}, \{-2, 12\}, \{-2, 23\}, \{\{7\}, 12\}, \{\{7\}, 23\}, \{12, 23\}, \{3, -2, \{7\}\}, \{3, -2, 12\}, \{3, -2, 23\}, \{3, \{7\}, 12\}, \{3, \{7\}, 23\}, \{3, 12, 23\}, \{-2, \{7\}, 12\}, \{-2, \{7\}, 23\}, \{-2, 12, 23\}, \{\{7\}, 12, 23\}, \{3, -2, \{7\}, 12\}, \{3, -2, \{7\}, 23\}, \{3, -2, 12, 23\}, \{3, \{7\}, 12, 23\}, \{-2, \{7\}, 12, 23\}, \{3, -2, \{7\}, 12, 23\}\}$$

(i) $\{3, 12\} \in P(A)$ ~~T~~ **T** ✓

(ii) $\{7\} \in P(A)$ ~~T~~ **F** ✓

(iii) $\{\{7\}, 23\} \subseteq P(A)$ ~~T~~ **F** ✓

(iv) $\{7\} \in A$ **T** ✓

(v) $|P(A)| = 10$ **F** ✓

$$\frac{15}{15}$$

QUESTION 2. Let $W = \{-4, -3, 2, 5, 7, 0, 23, 42\}$ (be the universal set). Given $A = \{2, 7, 23, 42\}$ and $B = \{5, 23, 42\}$.(i) Find $A - B$.

$$A - B = \{2, 7\}$$
 ✓

(ii) Find $B - A$.

$$B - A = \{5\}$$
 ✓

(iii) Find $A \cap B$

$$A \cap B = \{23, 42\}$$
 ✓

(iv) Find $A \cup B$

$$A \cup B = \{2, 5, 7, 23, 42\}$$
 ✓

(v) Find \bar{B}

$$\bar{B} = \{-4, -3, 2, 7, 0\}$$
 ✓

Faculty information

Ayman Badawi, Department of Mathematics & Statistics, American University of Sharjah, P.O. Box 26666, Sharjah, United Arab Emirates.
E-mail: abadawi@aus.edu, www.ayman-badawi.com

Abdelaziz Mostafa

Quiz IV (MW) MTH 213, Spring 2019

b00074028

Ayman Badawi

QUESTION 1. a) Let $m = 300$. How many $0 < \text{integers} < m$ are there where the $\text{gcd}(\text{integer}, 300) = 4$

$$\text{Let } n = 4.$$

$$\text{Then: } \frac{m}{n} = 75 = 5 \cdot 15 = 5 \cdot 5 \cdot 3$$

$$\text{Hence } \phi\left(\frac{m}{n}\right) = (5-1) \cdot 5^1 \cdot (3-1) = 40.$$

b) Find $5^{14} \pmod{7}$ — There are 40 integers between 0 and m
 s.t. $\text{gcd}(\text{any } \phi\left(\frac{m}{n}\right), 300) = 4.$

$$\frac{5}{5}$$

QUESTION 2. Let $W = \{2, 5, 7, 0, 23\}$ (be the universal set). Given $A = \{2, 0, 23\}$ and $B = \{5, 23\}$.(i) Find $A - B$.

$$A - B = \{2, 0, 23\} - \{5, 23\} = \{2, 0\}$$

(ii) Find $B - A$.

$$B - A = \{5, 23\} - \{2, 0, 23\} = \{5\}$$

(iii) Find $A \cap B$

$$A \cap B = \{2, 0, 23\} \cap \{5, 23\} = \{23\}$$

(iv) Find $A \cup B$

$$A \cup B = \{0, 2, 5, 23\}$$

(v) Find \overline{B}

$$\overline{B} = \{0, 2, 7\}$$

Faculty information

Ayman Badawi, Department of Mathematics & Statistics, American University of Sharjah, P.O. Box 26666, Sharjah, United Arab Emirates.
 E-mail: abadawi@aus.edu, www.ayman-badawi.com

Quiz V (MW) MTH 213, Spring 2019

Ayman Badawi

QUESTION 1. Find $5^{51} \pmod{36}$

$\gcd(36, 5) = 1 \Rightarrow \phi(n) = (2-1) \cdot 2 \cdot (3-1) \cdot 3 = 12$
 $36 = 2^2 \cdot 3^2$
 $\phi(n) = 12$



$51 = \phi(n) \cdot \square + \hat{1}$
 $51 = 12 \cdot 4 + \hat{3}$

$5^{12 \cdot 4} \cdot 5^3 \pmod{36} = 5^3 \pmod{36} = 17 \pmod{36} = 17$

QUESTION 2. Let $M = \{\{2\}, 2, 5, 7, 0, \{23\}\}$. Write down T or F.

- (i) $\{2\} \in M$ T
- (ii) $\{7, \{23\}\} \in P(M)$ T
- (iii) $\{\{2\}, \{5, 7\}\} \subseteq P(M)$ T
- (iv) $|P(M)| = 12$ F
- (v) $\{7, \{2\}\} \subseteq P(M)$ F

$|M| = n(M) = 6$
 $|P(M)| = n(P(M)) = 2^6 = 64$

QUESTION 3. Given $a_n = 2a_{n-1} + 8a_{n-2}$, where $a_0 = 8$ and $a_1 = 14$. Find an equation that describe the sequence a_n .

$\frac{x^n}{x^{n-2}} = \frac{2x^{n-1}}{x^{n-2}} + \frac{8x^{n-2}}{x^{n-2}}$

$x^2 = 2x + 8 \Rightarrow x^2 - 2x - 8 = 0$
 $x = 4$
 $x = -2$ } 2 distinct solutions

$a_n = c_1(4^n) + c_2(-2^n)$

$a_0 = 8 = c_1 + c_2$
 $a_1 = 14 = 4c_1 - 2c_2$ } $c_1 = 5$
 $c_2 = 3$

$a_n = 5(4^n) + 3(-2^n)$

Find a_7

$a_7 = 5(4^7) + 3(-2^7) = 81536$

Faculty information

Ayman Badawi, Department of Mathematics & Statistics, American University of Sharjah, P.O. Box 26666, Sharjah, United Arab Emirates.
 E-mail: abadawi@aus.edu, www.ayman-badawi.com

Ismat Maarouf Quiz 6 (UTR) MTH 213, Spring 2019

74072

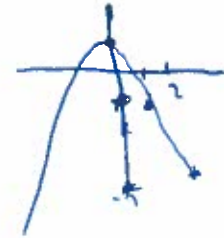
Ayman Badawi

15/25

QUESTION 1. Consider the following

1) $F : (-\infty, 2] \rightarrow (-\infty, -8]$, s.t. $f(x) = -2x^2 + 1$. If F is not a function, then change the codomain so that it becomes a function but not ONTO

$f(x) = -2x^2 + 1$



\Rightarrow co-domain = $(-\infty, 2]$

$F : (-\infty, 2] \rightarrow (-\infty, 2]$

2) $f : (0, 3] \rightarrow [0, 9)$ s.t $f(x) = -x^2 + 9$. Then $f(x)$ is a function. Is F bijective? if yes then find f^{-1} . If not, then give me a reason.



Range = $[0, 9)$ = co-domain

\Rightarrow onto \Rightarrow surjective

$\neq 1-1 \Rightarrow$ Bijective

$f^{-1} : [0, 9) \rightarrow (0, 3]$

$y = -x^2 + 9$

$\Rightarrow x = -y^2 + 9 \Rightarrow y^2 = 9 - x \Rightarrow y = \sqrt{9 - x}$

3) Given $f : [4, 12] \rightarrow [2, 4]$ is a bijective function such that $f(x) = \sqrt{2x+1} - 1$. Find the domain and the range of f^{-1} . Then find a formula for f^{-1} .

$f^{-1} : [2, 4] \rightarrow [4, 12]$ codomain

$y = \sqrt{2x+1} - 1$

$\Rightarrow x = \sqrt{2y+1} - 1$

$\Rightarrow \sqrt{2y+1} = x+1$

$\Rightarrow 2y+1 = (x+1)^2$

$\Rightarrow 2y = (x+1)^2 - 1$

$\Rightarrow y = \frac{(x+1)^2 - 1}{2}$

4) Let $f = \begin{pmatrix} 1 & 2 & 3 & 4 & 5 & 6 & 7 & 8 & 9 & 10 \\ 5 & 3 & 6 & 2 & 7 & 9 & 8 & 1 & 10 & 4 \end{pmatrix}$

a) Find F^2

$f^2 = f \circ f \Rightarrow f^2 = \begin{pmatrix} 1 & 2 & 3 & 4 & 5 & 6 & 7 & 8 & 9 & 10 \\ 7 & 6 & 9 & 3 & 8 & 10 & 1 & 5 & 4 & 2 \end{pmatrix}$

b) Find the least positive integer $n \geq 1$ such that $f^n = I$.

Rewrite: $f = (1\ 5\ 7\ 8) \circ (2\ 3\ 6\ 9\ 10\ 4)$
 4-cycle 6-cycle

$\Rightarrow \text{LCM}(4, 6) = \frac{24}{2} = 12 = n$
 $\Rightarrow f^{12} = I, n=12$

Faculty information

Ayman Badawi, Department of Mathematics & Statistics, American University of Sharjah, P.O. Box 26666, Sharjah, United Arab Emirates.
 E-mail: abadawi@aus.edu, www.ayman-badawi.com

$\Rightarrow f^{12} = I$

Quiz 6 (UTR) MTH 213, Spring 2019

Ayman Badawi

Hania khafagy
74231

~~15~~
15
5

QUESTION 1. Consider the following

1) $F : (-\infty, 2] \rightarrow (-\infty, -8]$, s.t. $f(x) = -2x^2 + 1$. If F is not a function, then change the codomain so that it becomes a function but not ONTO

3

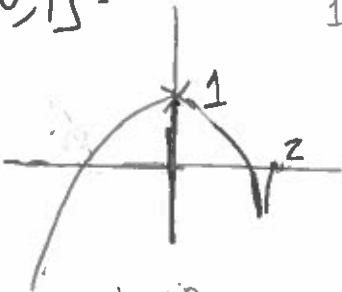
Range = $(-\infty, 1]$

onto = Codomain = range

1-1

Hence Codomain

~~Range~~
 $= (-\infty, b), b > 1$



$y = -2x^2 + 1$

$x = 0 \quad y = 1$

$y = 1 \quad x = -\sqrt{\frac{1}{2}}$

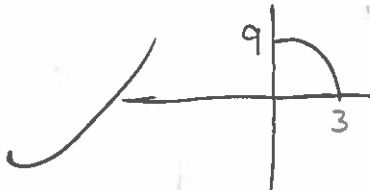
$\frac{1}{2} = x^2$

note $\rightarrow \mathbb{R}$
is ok too
range = $(-\infty, 1]$

$F : (-\infty, 2] \rightarrow (-\infty, 2]$ range \neq Codomain

2) $f : (0, 3] \rightarrow [0, 9]$ s.t. $f(x) = -x^2 + 9$. Then $f(x)$ is a function. Is F bijective? if yes then find f^{-1} . If not, then give me a reason.

3



range = $(0, 9]$

range = codomain onto ✓

$y = 0 \quad x = \sqrt{9} = 3$

onto (codomain = range)

1-1 Yes, it's bijective

$f^{-1}(x) = x = -y^2 + 9 \quad y = \sqrt{9-x}$
 $f^{-1}(x) = \sqrt{9-x}$

3) Given $f : [4, 12] \rightarrow [2, 4]$ is a bijective function such that $f(x) = \sqrt{2x+1} - 1$. Find the domain and the range of f^{-1} . Then find a formula for f^{-1}

$f : [4, 12] \rightarrow [2, 4]$

bijective onto ✓ 1-1 ✓

$f(x) = \sqrt{2x+1} - 1$

$f^{-1} : [2, 4] \rightarrow [4, 12]$

$f^{-1}(x) =$

$\begin{cases} y = \sqrt{2x+1} - 1 \\ x = \sqrt{2y+1} - 1 \\ \frac{(x+1)^2 - 1}{2} = y \end{cases}$

$f^{-1}(x) = \frac{(x+1)^2 - 1}{2}$

~~Domain of f^{-1}~~
~~Codomain of f^{-1}~~

2/3

4) Let $f = \begin{pmatrix} 1 & 2 & 3 & 4 & 5 & 6 & 7 & 8 & 9 & 10 \\ 5 & 3 & 6 & 2 & 7 & 9 & 8 & 1 & 10 & 4 \end{pmatrix}$

2


a) Find F^2

$f^2 = (f \circ f) = f(f(1)) = f(5) = 7$

$f^2 = \begin{pmatrix} 1 & 2 & 3 & 4 & 5 & 6 & 7 & 8 & 9 & 10 \\ 7 & 6 & 9 & 3 & 8 & 10 & 1 & 5 & 4 & 2 \end{pmatrix}$

4

b) Find the least positive integer $n \geq 1$ such that $f^n = I$.



$LCM = \frac{4 \times 6}{gcd(4,6)} = \frac{4 \times 6}{2} = \frac{24}{2} = 12$
 $F^{12} = I$

Faculty information

Ayman Badawi, Department of Mathematics & Statistics, American University of Sharjah, P.O. Box 26666, Sharjah, United Arab Emirates.
E-mail: abadawi@aus.edu, www.ayman-badawi.com

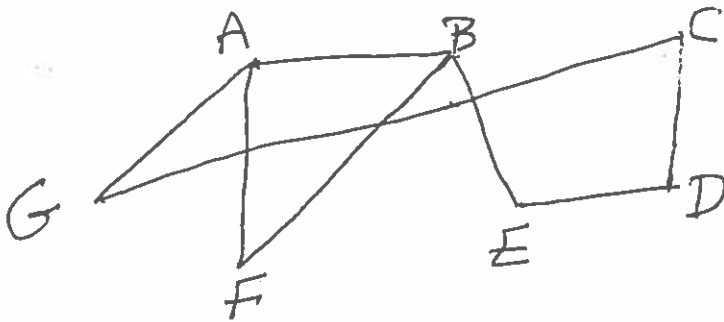
Quiz 7 (MW) MTH 213, Fall 2018

Notasha M.

Ayman Badawi

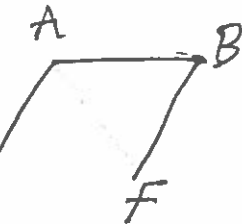
76735

QUESTION 1. Consider the following Graph G.



15
15

(i) Is

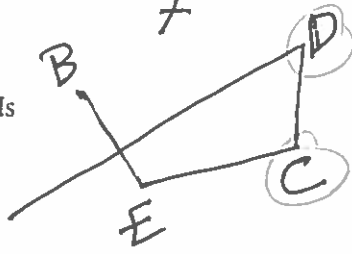


an induced subgraph of G? Explain No.

Because the edge A-F exists in G but does not show in this graph.

3/12

(ii) Is



a subgraph of G? explain

~~Yes, because~~

No, bc edges G-D and E-C do not exist in E_H

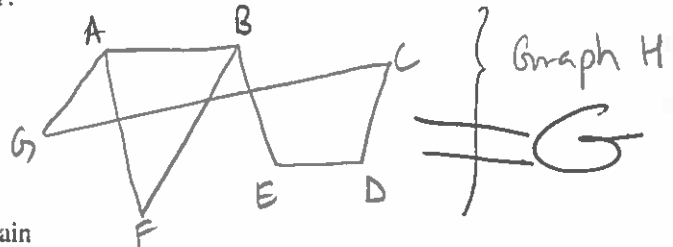
and $V_H \subseteq V_G \therefore E_H \neq E_G$

2/20

(iii) If H is an induced spanning graph of G, then draw H.

induced AND spanning only when $H = G$ ∴

requires that $V_H = V_G$



3/3

(iv) Is A-B-E-B-F a path in G? explain

No, because a path is $v_i - v_{i+1} - v_{i+2} - \dots - v_n$ where $v_i, v_{i+1}, v_{i+2}, \dots, v_n$ are distinct vertices.

but here B is repeated, thus, it is not a path.

2/12

(v) Is D-E-B-F-A-G-C-D a cycle in G? explain

Yes, because by definition, a cycle is $v_i - v_{i+1} - v_{i+2} - \dots - v_n - v_i$ where $v_i, v_{i+1}, v_{i+2}, \dots, v_n$ are distinct vertices.

2/2

What does it mean when you say this graph is connected?

for every two vertices in the graph \exists a path between them, connecting them.

↑ there exists

3/3

Faculty information

Ayman Badawi, Department of Mathematics & Statistics, American University of Sharjah, P.O. Box 26666, Sharjah, United Arab Emirates.
E-mail: abadawi@aus.edu, www.ayman-badawi.com